

MINISTRY OF EDUCATION AND HIGHER EDUCATION

FORM FOUR EXAMS, 2013

GEOGRAPHY



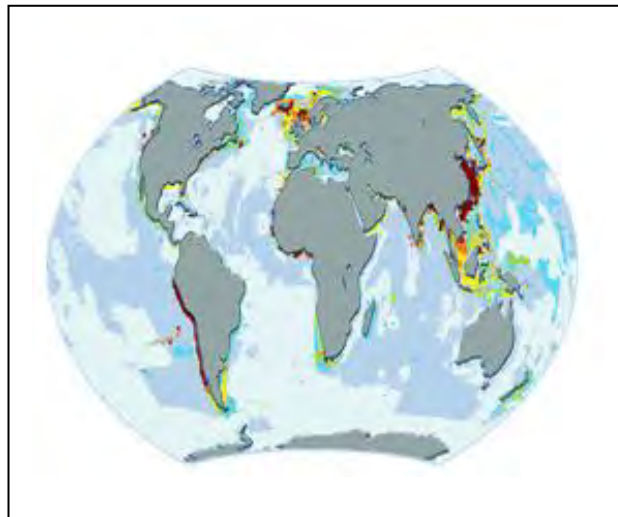
P/LAND NATIONAL EXAMINATION BOARD

PART ONE: MULTIPLE CHOICE QUESTIONS.

Circle the correct answer. (10 marks)

1. All of the following features are produced by lava solidifying within the earth's crust **except**
 - A. Sills
 - B. lava cone
 - C. Batholiths
 - D. Laccoliths
2. In Punt land, plant growth can go on only in the wet seasons especially in the
 - A. Haggaa
 - B. Dayr
 - C. Jiilaal
 - D. Gu'
3. Which of the following countries is leading in the production of gold in the world?
 - A. South Africa
 - B. USA
 - C. China
 - D. Ethiopia
4. Look at the map below, which ocean occurs between continents of Africa and South America?

- A. Pacific
- B. Indian
- C. Atlantic
- D. Antarctic



5. All of the following are the world's major fishing grounds **except**
 - A. North-west coasts of Europe
 - B. South-west coasts of Africa
 - C. North-east coasts of N. America
 - D. North-east coasts of Asia

6. Which of the following Arab countries has largest land area?
A. Somalia
B. Qatar
C. Libya
D. Algeria
7. Which of the following is a man-made lake?
A. Lake Naser
B. A delta lake
C. A caldera lake
D. An ox-bow lake
8. The world's population number in millions in 2000 AD was about
A. 3000
B. 5000
C. 7000
D. 4000
9. Extensive farming involves all of the following **except** one. Which is that one?
A. High yield per man
B. Use of large labour force
C. Large area per farm
D. Small number of crops
10. Tourists like to visit historic sites like
A. Qardo
B. Burtinle
C. Las anod
D. Taleh

PART TWO: STRUCTURAL QUESTIONS

Answer all the following questions in the space provided. **(50 marks)**

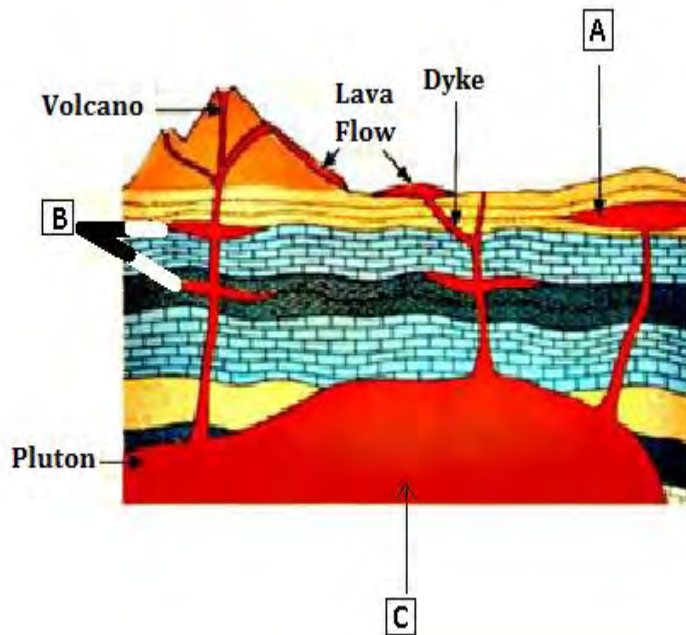
1. (a) Carefully distinguish between these terms. **(2 marks)**

(i) Volcanoes.

(ii) Earthquakes.

(b) Label the following diagram using words in the box. (3 marks)

Laccolith, batholiths, sill

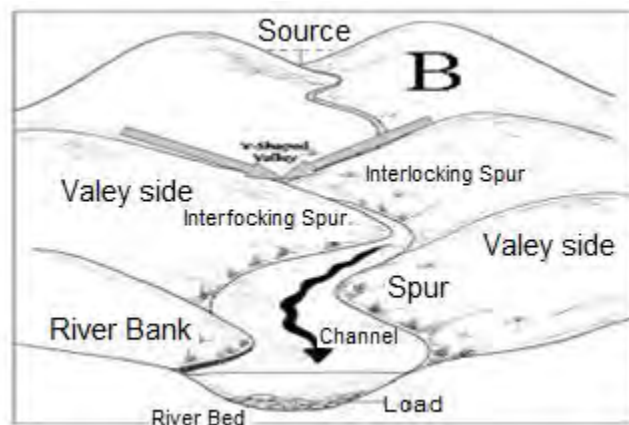
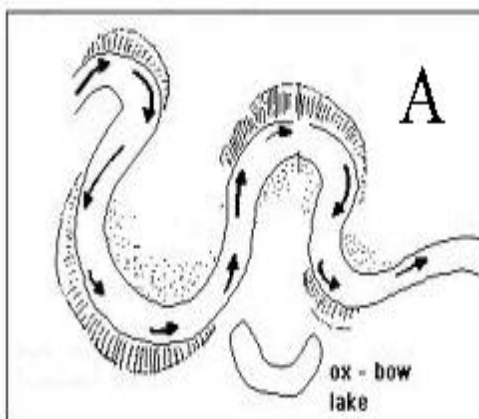


(A) _____

(B) _____

(C) _____

2. (a) Label these rivers with their appropriate stages (1 marks)



(A) _____

(B) _____

(b) Write down following characteristics under the river stages shown above (4 marks)

Erosion, deposition, fast- flowing, meanders

(A) (i) _____

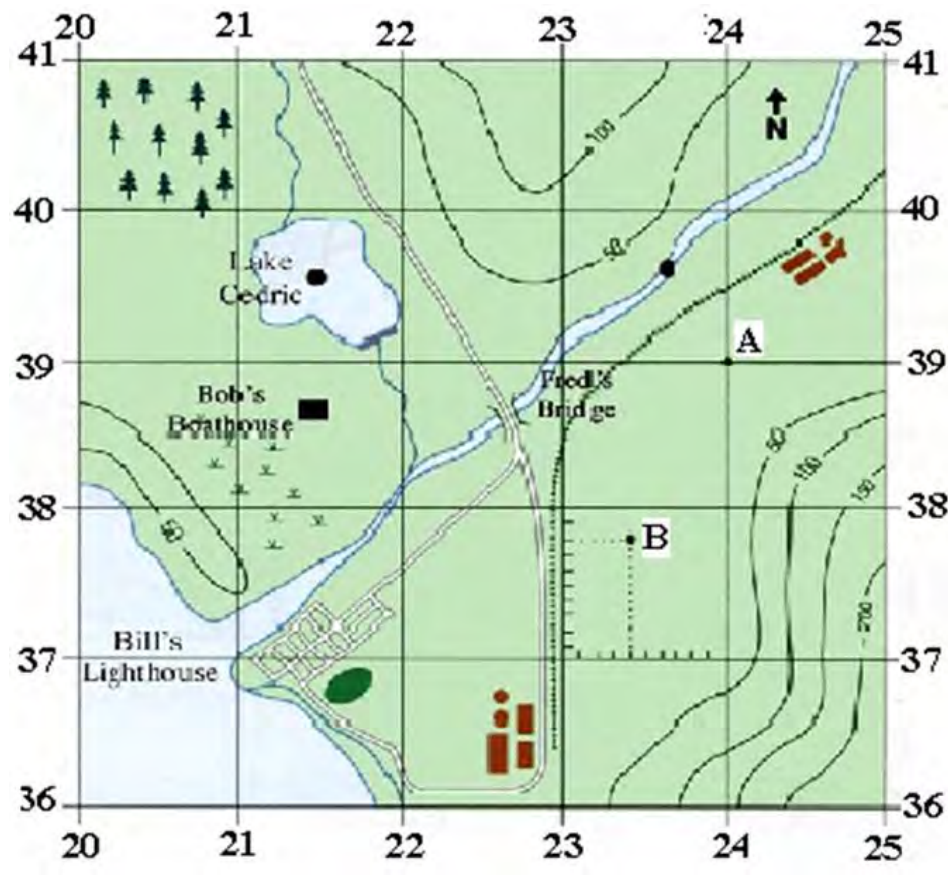
(ii) _____

(B) (i) _____

(ii) _____

3. Carefully study this map 1:100 000 and work out related questions. (5 marks)





a) Find the six figure form of "letter B"

b) Express the map scale (1:100 000) into Scale statement.

c) Measure the distance between “A” and “B” in Kilometers

d) Name any two human activities or occupations that can be extracted from the mapped area.


(i) _____

(ii) _____

4. (a) (i) What is a settlement? (5 mark)

(ii) Label these diagrams with their appropriate settlement patterns.

(A) _____ (B) _____



A



B

(b) Differentiate the above settlement patterns

(i) Settlement pattern

(ii) Settlement pattern

(a) Differentiate between the terms

(5 marks)

(i) Domestic tourism

(ii) International

(b) Identify any **three** economic benefits of tourism to Puntland

(i) _____

(ii) _____

(iii) _____

5. (a) Define “environment conservation”

(5 marks)

(b) Describe **four** problems associated with flooding. (4 marks)

7. (a) What is a mineral? (5 marks)

(b) Name **two** ways or forms that metallic minerals occur in the earth's crust.

(i) _____

(ii) _____

(c) For the named forms of occurrence Identify **two** methods used to extract them from the earth's crust.

(i) _____

(ii) _____

8. (a) Identify the **two** types of energy. (5marks)

(i) _____

(ii) _____

(b) State the **three** types of fossil fuel.

(i) _____

(ii) _____

(iii) _____

9. (a) How many countries are there in the Arab league states? (5 marks)

(i) _____

(ii) Name the headquarter for the Arab countries.

(b) Explain any **two** objectives for the establishment of the Arab League

(i) _____

(ii) _____



10. (a) The economic resources of Somalia are based on many items. Write down the largest **five** in sequence starting the important one and so on. (5 marks)

PART THREE

EXTENDED QUESTIONS:

Answer only **FOUR** questions out of the following six questions. (40 marks)

1. (a) (i) What is energy crisis? (1 mark)

(ii) Explain **four** causes of energy crisis in Somalia. (4 marks)

(b) Discuss **five** reasons why most of Puntland energy potentials have not been yet exploited. (5 marks)

2. (a) i) Define the term “Regional industry” (1 marks)

(ii) State and explain **four** factors influencing the location of a factory. (4 marks)




(b) Explain **five** significances of industries for the economy of a country. (5 marks)

3. (a) i) What is fishing? (1 marks)

(ii) Illustrating in a diagram, briefly describe how fish are caught by drift nets.

(5 marks)



(b) Discuss **four** problems facing fishing industry in Puntland. (4 marks)

4. (a) Name plantation crops shown below (2 marks)



(i) _____ (ii) _____

(b) For the above crops, compare and contrast conditions they require to grow well.

(8 marks)

Plantation (i)

Plantation (ii)

--	--

5. (a) (i) Define wildlife.

(1mark)

(ii) Discuss **four** significances of wildlife to economy of Somalia.



(b) Explain **five** problems that wildlife faces in Puntland (5 marks)

6. (a) (i) Write the abbreviated term "COMESA" in extended (1 mark)

(ii) Briefly discuss **four** factors influencing trade (4 marks)

(b) Explain **five** problems that trade faces in Puntland (5 marks)

END

