

**MINISTRY OF EDUCATION AND HIGHER EDUCATION**

**FORM FOUR EXAMS, 2012**

# **GEOGRAPHY**



**P/LAND NATIONAL EXAMINATION BOARD**

**PUNTLAND STATE OF SOMALIA**  
**MINISTRY OF EDUCATION**  
**NATIONAL EXAMINATIONS BOARD**

<b>NAME OF THE STUDENT</b>	
<b>NAME OF THE SCHOOL</b>	
<b>ROLL NUMBER</b>	

**FORM FOUR GEOGRAPHY EXAMINATION**

**May 2012**

**TIME 2:10 HOURS**

**INSTRUCTIONS TO CANDIDATES**

**Instructions to the candidate (please read carefully)**

This paper consist of 16 Pages, count now, if there is missing please inform to the invigilator

- Answer ALL question
- Write your working on the space provided below the question
- No allowed extra paper
- No allowed calculators
- If you write wrong answer please delete and write right the answer clearly
- This paper consist of two parts






## PART ONE

### Multiple choice Questions


(10 marks)

Circle the correct answer. There is only one answer for each question

1. The route through which planet flows as it revolves round the sun is called
  - a) Orbit
  - b) Route
  - c) Spheroid
  - d) Eclipse
2. Which one of the following is the leading commodity that puntland exports to abroad?
  - a) Banana
  - b) Livestock
  - c) Frankincense
  - d) Fish and Fish products
3. All the following factors influence population growth except :-
  - a) Birth rate
  - b) Fertility
  - c) Pyraulid
  - d) Migration
4. Intensive forming involves
  - a) High income per man
  - b) Maximum use of machinery
  - c) Low yield per unit area
  - d) Maximum use of labor force
5. Which one of the following best describes a primary industry
  - a) Food production
  - b) Shipbuilding
  - c) Mineral processing
  - d) Electronics



6. Atomic power is produced by a mineral called
- a) Gypsum
  - b) Uranium
  - c) Copper
  - d) Limestone
7. The largest trading centre in puntland is :-
- a) Galkaio
  - b) Garowe
  - c) Bossaso
  - d) Qardho
8. All the following are function of Garowe City except
- a) Communication centre
  - b) Residential centre
  - c) Mining centre
9. The most serious environmental hazard in puntland is
- a) Draughts
  - b) Wars
  - c) Floods
  - d) Pests and diseases
10. Which one of the following does not attract tourists in puntland?
- a) Wildlife
  - b) Skiing
  - c) War in / sandy beach
  - d) Beautiful



**PART TWO:**

**Answer all the following questions in the space provided**

1. Match word or words in column (A) to the correct answer in column (B)  
(6 marks)

Column (A)	Column (B)
I. The shape of earth	a) Mars
II. Gas and petroleum are	b) Modern transport way
III. The nearest planet to the sun	c) Spheroid or peoid
IV. Fish canning occurs	d) Farming centre
V. Airplane is a	e) Fossil fuels

2. Fill the cups using words in the following box (6 marks)

**Frankincense, mountain, ice sheets, agricultural, tropic of cancer, wastes**

- a. At 21 June, the is over -----
- b. Puntland is famous a source of -----
- c. Population density is low in ----- areas over 4,000 meters above sea level
- d. Chemical ----- from many industrialized countries are continuously being dumped into the coastal waters of Somalia
- e. In Somalia droughts mainly cause reduction in ----- production
- f. In polar regions ----- became barrier to the liners travelling across the seas.



3. a) Define Population distribution?

.....  
.....  
.....  
.....  
..... (1 marks)

b) Identify two factors that can cause high mortality rate in the developing countries

.....  
.....  
.....  
..... (2 marks)

c) Write down three factors that influence the growth of population


.....  
.....  
.....  
..... (3 marks)

4. a) What is an industry?

.....  
.....  
..... (1 marks)

b) Identify the three types of industries

.....  
.....



..... (3 marks)

c) Give two reasons why countries strive to be industrialized

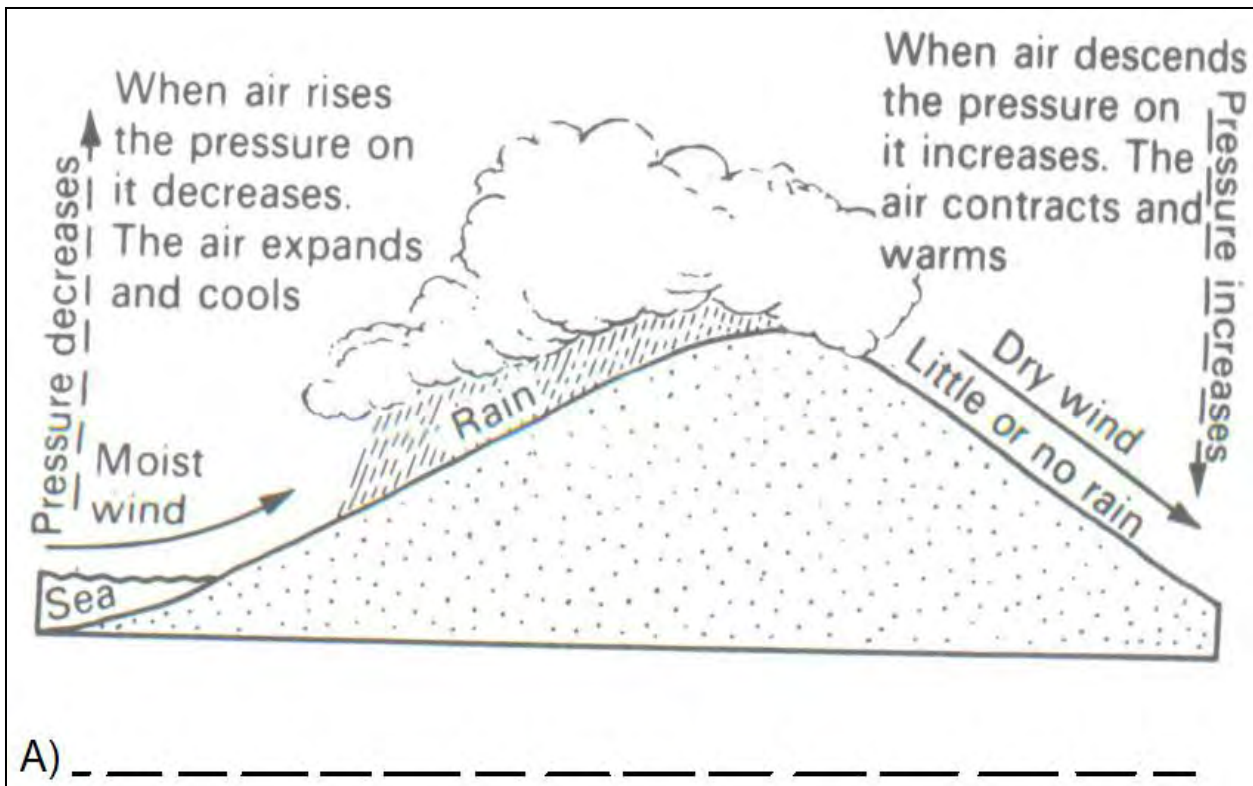
.....  
.....  
.....  
.....(2 marks)

5. a) What is a climate?

.....  
.....  
.....(1 marks)

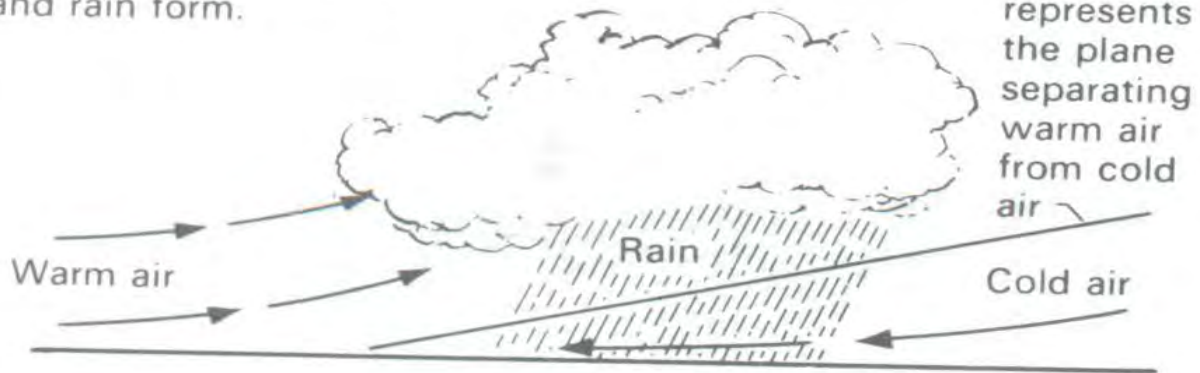
b) Label or Name the following types of rainfall?

(3 marks)





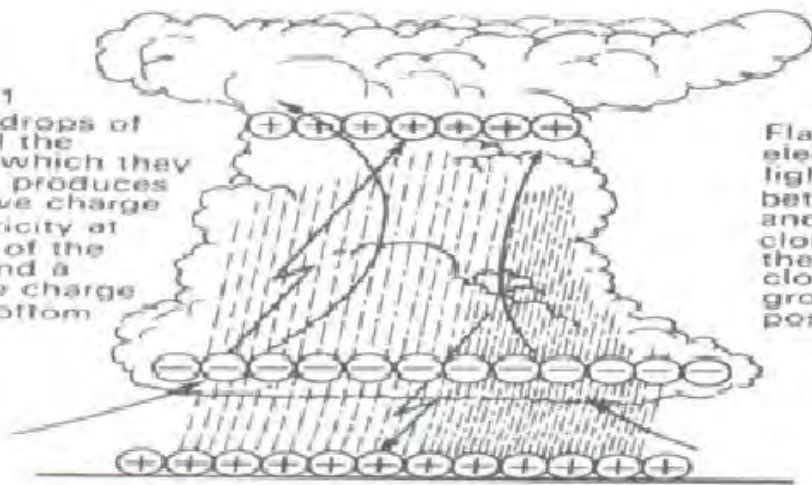
Warm air rises over cold air. It expands and cools. Condensation takes place and clouds and rain form.



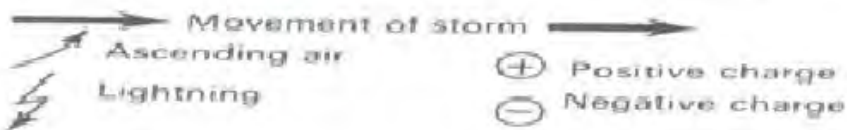
This line represents the plane separating warm air from cold air

B) -----

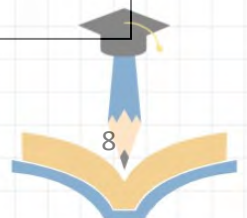
1  
As the drops of rain fall the energy which they contain produces a positive charge at the top of the cloud and a negative charge at the bottom



2  
Flashes of electricity (called lightning) pass between the top and bottom of the cloud and between the bottom of the cloud and the ground (which is positively charged)



C) -----



c) Explain how altitude influences temperature?

.....  
.....  
.....  
.....  
.....(2 marks)

6. a) Define “nomadic pastoralism”


.....  
.....  
..... (1 marks)

b) Identify three livestock breeds that are kept in Puntland?

.....  
.....  
.....  
..... (3 marks)

c) Discuss the role of Camel in the live of nomadic pastoralists

.....  
.....  
.....  
.....  
.....  
.....  
.....  
.....  
.....  
.....(2marks)



7. Show listed Somalia fishing ground on the map List of fishing regions in Somalia (6 marks)

Zaila, Berbera, Marka, Eil, Boohodle, Erigavo, Lasqoray, Hafun




8. a) Identify the three ways in which goods and people are transported from place to place in Somalia.

.....  
.....  
.....  
.....  
.....(3 marks)

- b) Discuss three problems facing land transportation in puntland.

.....  
.....  
.....  
.....  
.....(3 marks)



9. a) differentiate between

I. Rural and

.....  
.....  
.....  
.....

II. Urban settlements

.....  
.....  
.....  
.....(2marks)

b)

I. push factor which cause people to migrate from their home place


.....  
.....  
.....

II. Identify two pull factors that cause people to come to new place

.....  
.....  
.....  
.....  
.....(3 marks)

10. a) Define communication?

.....  
.....  
.....  
.....  
.....(1 marks)





### **PART THREE: Extended Questions**

**Answer only three questions out of the following five questions.**

**Each question carries 10 Marks**

1. A) Explain why it is necessary to manage and conserve the environment


.....  
.....  
.....  
.....  
.....  
.....  
.....  
.....

B) Discuss problems associated with environmental hazards

.....  
.....  
.....  
.....  
.....  
.....  
.....  
.....

2. A) Explain factors influencing population distribution in Somalia

.....  
.....  
.....  
.....  
.....  
.....  
.....  
.....



B) Define the following terms

I. Birth rate

.....  
.....  
.....

II. Death

.....  
.....

III. Migration

.....  
.....  
.....

IV. Over population

.....  
.....  
.....

V. Under Population


.....  
.....  
.....  
.....

3. A) Explain briefly factors that influence agriculture

.....  
.....  
.....  
.....  
.....  
.....

B) Discuss the importance of agriculture in national development

.....  
.....  
.....



.....

.....

.....

.....

.....

.....

.....

4. A) Define Mining

.....


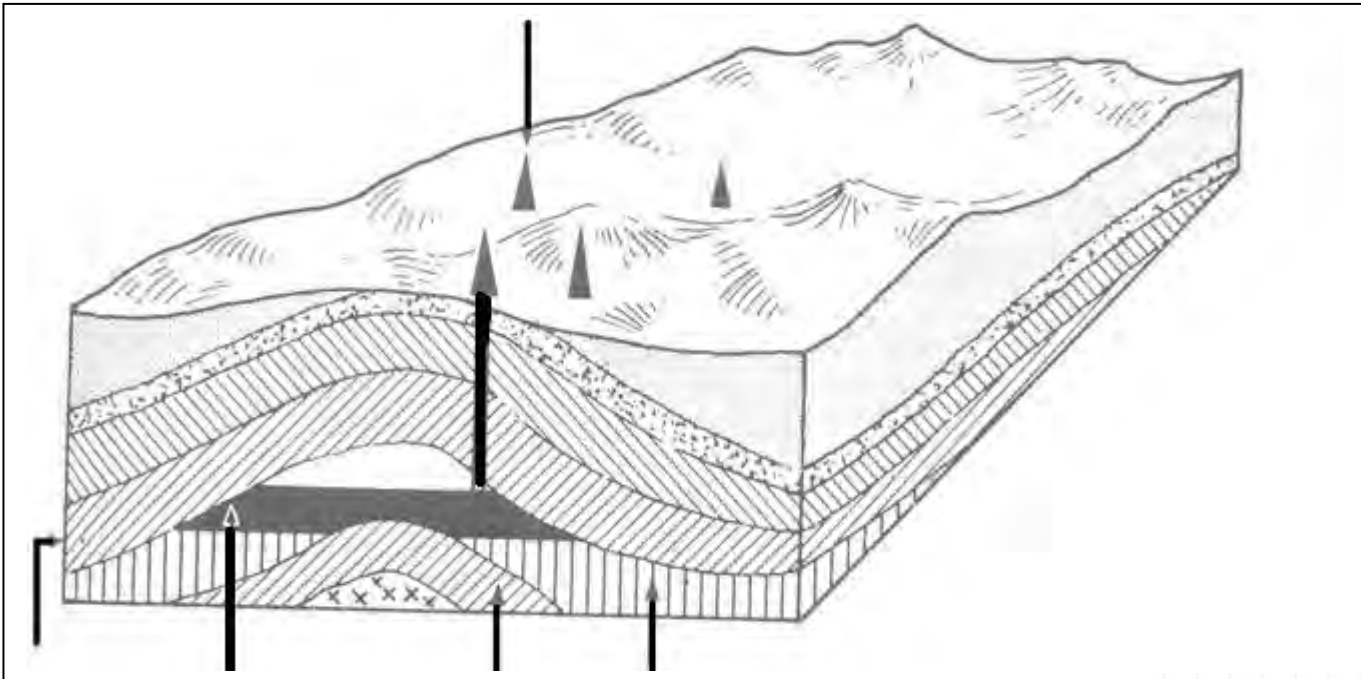
.....

.....

.....

B) Label this diagram with the given words in the box

Impervious rock, oil, oil drill, porous rock, water, gas





C) identify and explain characteristics and uses of gold

.....

.....

.....

.....

.....

.....

.....

5. A) Discuss the strategic location of Arab countries



.....

.....

.....

.....

.....

.....

.....

.....

.....

.....

.....

.....

B) Explain the food security of Arab countries

.....

.....

.....

.....

.....

.....

.....

.....

.....

.....

.....

END

