

MINISTRY OF EDUCATION AND HIGHER EDUCATION

FORM FOUR EXAMS, 2014

GEOGRAPHY



P/LAND NATIONAL EXAMINATION BOARD

PUNTLAND STATE OF SOMALIA
MINISTRY OF EDUCATION
NATIONAL EXAMINATIONS BOARD

NAME OF THE STUDENT	
NAME OF THE SCHOOL	
ROLL NUMBER	

FORM FOUR GEOGRAPHY EXAMINATION MAY 2014
TIME 2:10 HOURS

INSTRUCTIONS TO CANDIDATES

Instructions to the candidate (please read carefully)

This paper consist of 16 pages, count now, if there is missing please inform to the invigilator


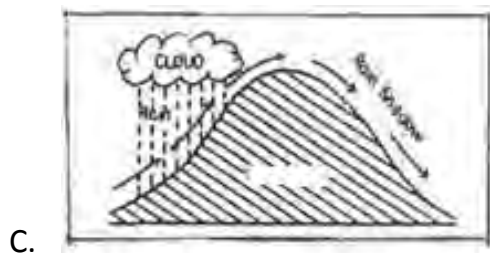
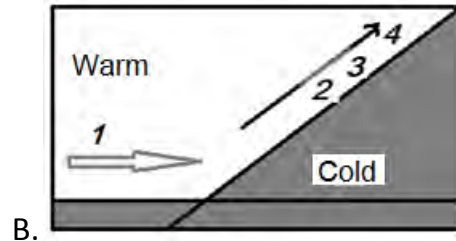
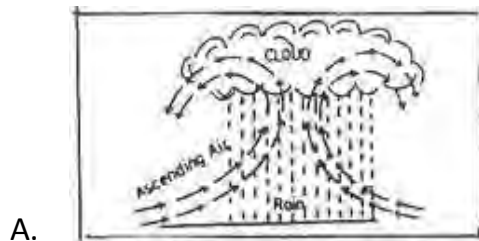
- Answer **ALL** questions in part 1 and 2 and **four** questions in part 3.
- Write your working on the space provided below the question.
- No allowed extra paper
- This paper consist of three parts
- PART 1: (10 multiple choices) = 10 marks
- PART 2: (10 structured questions) = 50 marks
- PART 3: (4 questions) = 40 marks
- Total = 100 marks



7. Which of the following factors leads to low fertility rate?

- A. Early marriages
- B. High illiteracy level
- C. Religious beliefs
- D. Late marriages

8. Which of the following diagrams represents convectional rainfall?



9. Which of the following means of communication is most efficient in use?

- A. Sending a letter
- B. Using mobile phone
- C. Using a gesture
- D. Using a telegraph

10. The excess of births over deaths in every 1000 people is called

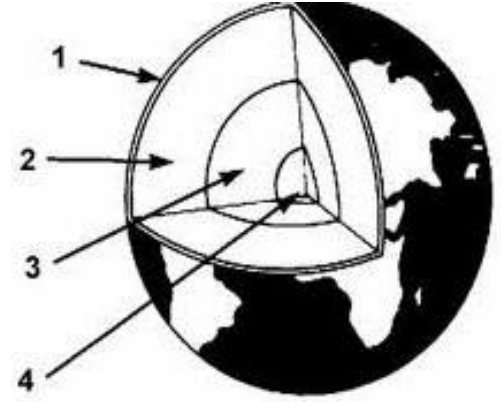
- A. emigration
- B. Age structure
- C. Natural increase
- D. Life expectancy



PART TWO: STRUCTURED QUESTIONS – 50 MARKS. Answer all questions in this part in the space provided.

1. Label the following diagram in relation to the structure of the earth – **4 marks**

- 1. _____
- 2. _____
- 3. _____
- 4. _____



2. (a) Define the term “urbanization” - **1 marks**

(b) identify any four factors which attract settlement (pull factors) – **4 marks**

(i) _____

(ii) _____

(iii) _____

(iv) _____



3. (b) List these words under Columns **A** and **B** respectively – **5 marks**

Aluminum, Salt, silver, diamond, copper,

Metallic minerals A	Non- metallic B

4. (a) Define the term “Environment” - **1 mark**


(b) Name any four environmental hazards - **4 marks**

(i) _____

(ii) _____

(iii) _____

(iv) _____

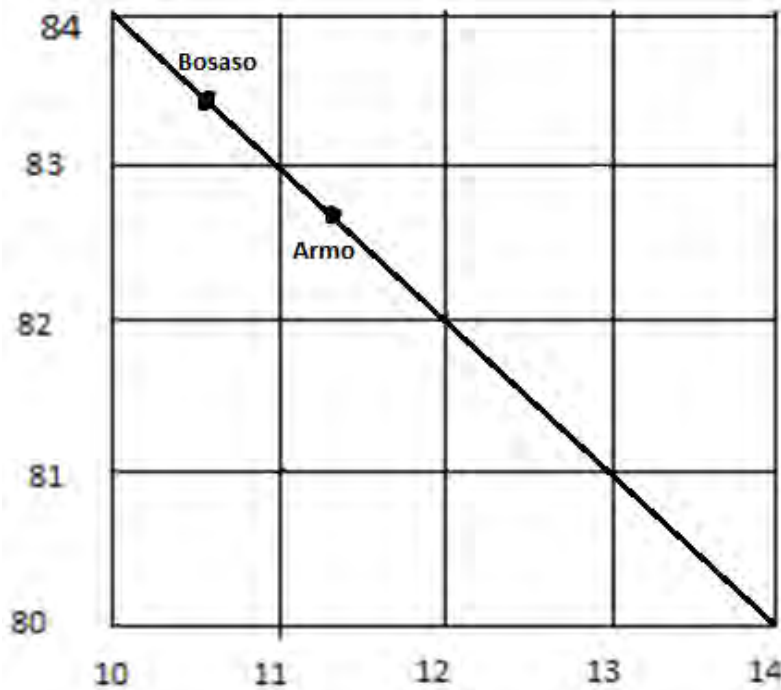


5. Below is an illustration of the political map of Puntland. List capital cities in front of the following regions respectively - **5 marks**



1. Ayn _____
2. Hayland _____
3. Karkaar _____
4. Nugaal _____
5. Sanaag _____

6. Carefully study this map grid below (1:1000, 000) and answer the related questions -



(a) Convert the map scale (1:100, 000) into scale statement - **1 mark**

(b) Measure the bearing of **Armo** from **Bosaso**. -1 mark

(c) Measure the direction of **Bosaso** from **Armo**. - 1 mark

(d) If the distance between **Bosaso** and **Armo** is 10 cm (on a straight line) on the map, measure the same area on the ground in kilometers - 1 mark

(e) In which political region is **Armo** located? 1 mark

7. (a) What is Geography? - 1 mark



(b) State the two main parts of geography - **2 marks**

(i) _____

(ii) _____

(c) Outline any two importance's of Geography - **2 marks**

(i) _____

(ii) _____

8. (a) Differentiate between land transport and water transport – **2 marks**

(i) _____

(ii) _____

(b) Identify any three factors influencing the transportation - **3 marks**

(i) _____

(ii) _____



(iii) _____

9. (a) Define what is agriculture - **1 mark**

(b) Identify four factors that influence agriculture - **4 marks**

(i) _____

(ii) _____

(iii) _____

(iv) _____

10. Give two causes for each of the following factors –

(a) Why are world countries different in crop production? **2 marks**

(i) _____

(ii) _____

(b) Why is there food shortage in the Arab countries? **2 marks**

(i) _____



(ii) _____

(c) Why are there high traffic accidents in Puntland? **2 marks**

(i) _____

(ii) _____

PART THREE: Extended questions – 40 marks

Answer only FOUR questions out of the following six questions


(In the space provided)

1. (a) Define the term “energy” - **1 mark**

(b) List these words under Columns **A** and **B** respectively – **5 marks**

Solar, Coal, Petroleum, HEP, Uranium,

Renewable A	Non-renewable B



(c) Differentiate the two types of energy - **4 marks**

(I) Renewable sources of energy

(II) Non-renewable sources of energy

2. (a) Define the term “pollution”- **1 mark**

(b) List these words under Columns **A** and **B** respectively - **5 marks**

Drought, Erosion, Diseases, Windstorms, Deforestation

Natural hazards A	Human-induced hazards B

(c) Explain four significances of the environment to man - **4 marks**

3. Define the terms “intensive and extensive agriculture? **2 marks**


(b) Differentiate between characteristics of intensive and extensive agriculture – **8 marks**

Intensive agriculture	Extensive agriculture
i.	a.
ii.	b.
iii.	c.
iv.	d.
v.	e.

4. (a) Name two simple traditional methods used for catching fish - **2 marks**

(i) _____

(ii) _____



(b) Name four major fishing grounds of the world - **4 marks**

(c) Discuss any four factors that have promoted major world fishing grounds **4 marks**

5. Define the term "Transportation" **1 mark**

(b) Explain four benefits of road transport in Puntland - **4 marks**



(c) Describe five uses of mobile phones rather than transferring information **5 marks**

(i) _____

(ii) _____


(iii) _____

(iv) _____

(v) _____

6. (a) (i) When did Somalia join the Arab League Countries? **1 mark**

(ii) List four Arab countries which occur in Northern Africa - **4 marks**



b) (i) Name two important rivers that run through middle east countries (sham) –

2 marks

i) _____

ii) _____

(ii) Discuss any three features making Arabs occur an important strategic position

3 marks

END

