

MINISTRY OF EDUCATION AND HIGHER EDUCATION

GRADE 12 EXAMS, 2023

GEOGRAPHY



P/LAND NATIONAL EXAMINATION BOARD





MINISTRY OF EDUCATION AND HIGHER EDUCATION
PUNTLAND NATIONAL EXAMINATIONS BOARD

Name of Student			
Roll Number			
Name of School			
Region:		District:	

FORM FOUR EXAMINATION, 2023
TIME: 2 HOURS AND 10 MINUTES FOR READING

GEOGRAPHY

Instructions to candidates

- Answer all Part one and Part two questions.
- Answer any TWO questions for Part three
- This paper consists of 10 pages, count it and if any is missing inform your invigilator
- Write your **name and roll number** on the exam paper
- No extra paper is allowed.
- If you make a mistake, **cross out the incorrect answer and write your correct answer.**

This exam paper consists of following Parts

Parts	Marks
Part one: Multiple choice question	10 marks
Part two: Matching questions	8 marks
Part three: Structured questions	68 marks
Part four: Extended question	14 marks
Total:	100 Marks

For the markers only

PARTS	MARKS
Part one:	
Part two:	
Part three:	
Part four:	
Total:	



Use this page for rough work. It will NOT be marked.

A series of horizontal dotted lines for rough work.

PART ONE: MULTIPLE CHOICE**(10 MARKS)****Circle the correct answer**

1. Which one of the following countries is NOT member of the Arab League?

- A. Lebanon
- B. Mauritania
- C. Palestine
- D. Eritrea

2. When The shadow lies east of the object, the time that the photo was taken is:

- A. Afternoon
- B. Morning
- C. Noon
- D. Evening

3. Which type of livestock farming does the below picture showing us?

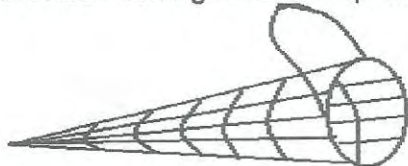
- A. Beef farming
- B. Dairy farming
- C. Arable farming
- D. Mixed farming



4. Mining methods used to extract minerals lie very deep in the ground is called:

- A. Surface mining
- B. Underground mining
- C. Dredging
- D. Open cast.

5. Which fishing method represents the following diagram?



- A. Barrier methods
- B. Trawling methods
- C. Basket methods
- D. Hook and line method.



6. This refers to the cultivation of crops on a small area of land.
- A. Extensive
 - B. Commercial
 - C. Permanent
 - D. Intensive
7. Examples of food processing industries are ____.
- A. Leather and textile factory
 - B. Flour and fruit factory
 - C. Cement and weapon factory
 - D. Cigarette and match factory
8. The movement of people and goods from one place to another by carrying goods on heads and shoulders is known as.
- A. Human transport
 - B. Animals transport
 - C. Air transport
 - D. water transport
9. Which of the following is NOT among physical factors influencing communication?
- A. Floods
 - B. Earthquake
 - C. Capital
 - D. Relief
10. The type of energy generated from a water in motion is called ____.
- A. Solar power
 - B. Nuclear power
 - C. Hydro-power
 - D. Wind power

PART TWO: MATCHING

(8 MARKS)

Match the terms in **Column A** with their in meaning **Column B**

Column A	Answer	Column B
Meaning		Terms
1. Non- renewable energy		a) Type of industry mainly involving extraction of raw material
2. Secondary industry		b) Sources of energy that can be renewed.
3. Cottage industry		c) Planting in an area where trees non- existed before.
4. Primary industry		d) The type of industry which produce services
5. Re-afforestation		e) Source of energy which eventually finished
6. Afforestation		f) Industry that involves making products in homes by using hand and simple tools.
7. Tertiary industry		g) Planting in an area where trees have been cut down.
8. Renewable energy		h) Changing raw material into finished goods is known as

PART THREE: STRUCTURED QUESTIONS (68 MARKS)

1) **A.** Define the term Arab-league (1 mark)

.....

B. Identify any two objectives of Arab-league (2 marks)

.....

C. Fill the blank spaces by using the suitable words n the brackets (4 marks)
(Suez, Hurmuz, Gibraltar, Bab-al-Mandab)

- I. The strait that links between Arabian gulf and Arabian sea _____.
- II. The strait that links between Mediterranean Sea and Atlantic Ocean. _____.
- III. A canal that links between Mediterranean Sea and red sea. _____.
- IV. The strait that links between Red sea and Gulf of Adan _____.



2. A) What is the population pattern? (1mark)

.....
.....

B) State any three patterns of population in Arab-world. (3Marks)

.....
.....

3.A) Define the term photography. (1mark)

.....
.....

B) List any two uses of photography (2mark)

.....
.....

C) Examine the photo below carefully and answer the questions that follow. (3ma



i. Describe Type of photograph shown above. (1mark)

.....

ii. Identify the economic activity taking place in this photograph (1mark).

.....

iii. State the season of the photograph (1mark).

.....

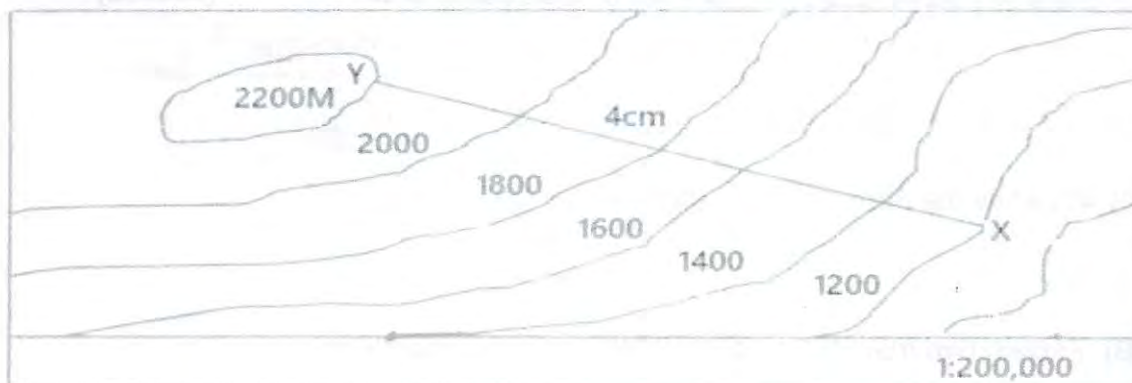
4) A) Define the term Gradient. (1mark).

.....
.....

B) State any three uses of gradients. (3marks)

.....
.....

C) Calculate the gradient of the following points on the map. (4marks).



.....

.....

.....

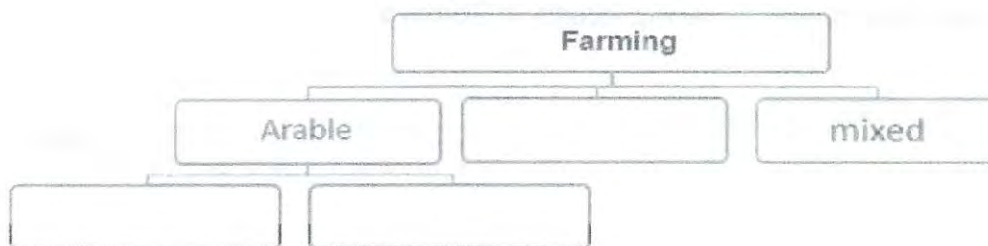
.....

5.A) Define the term Agriculture. (1mark)

.....

.....

B) Study carefully at the below diagram and then Complete it. (3marks)



C) Name any four physical factors that influence Agriculture (2marks)

.....

.....

D) Describe types pastoralism (3marks).

.....

.....



E) State any three characteristics of nomadic pastoralism. (3marks)

.....
.....

6) A) Define the term mining. (1mark).

.....

B) Explain two main types of minerals? (2marks)

.....
.....
.....

C) Identify any three importance of mining. (3Marks)

.....
.....
.....

7. A) What are forests? (1mark)

.....

B) State any four problems facing forests in Somalia (2marks)

.....
.....
.....
.....

C) Identify any two measures to be taken to conserve forests. (2marks)

.....
.....

8. A) Define the term Communication (1mark)

.....

B) List types of communications. (3marks)

.....



C) Name the type of communication this diagram represents (1mark)



.....
.....

9. A) Define term of industry 1mark .

.....

B). Explain **Four** factors influencing the location and Development of industries. **(2marks).**

.....
.....
.....

C). Name the branches of secondary industries. And give **two** Examples each of them. **(2marks)**

.....
.....

10.A) Define the term fishing? (1mark)

.....
.....

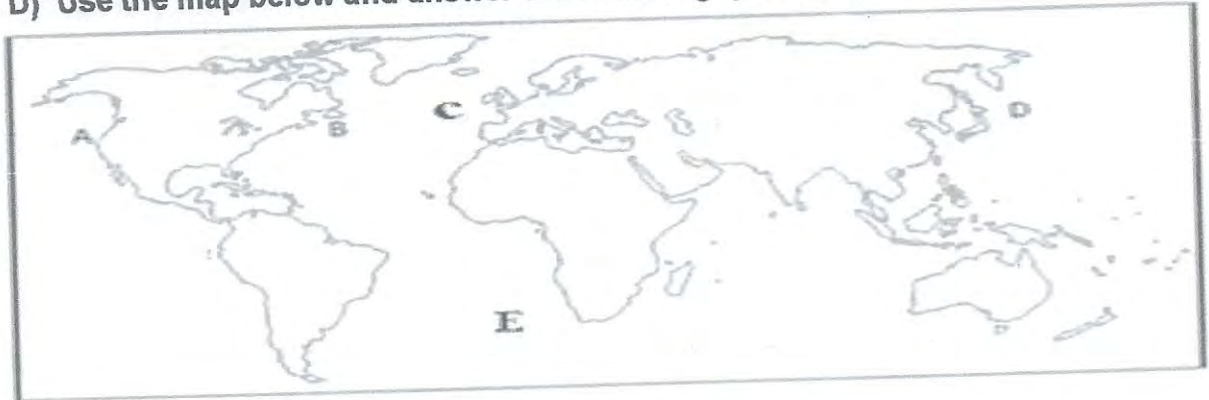
B) Explain **two** Human factors that influence fishing activities. (2marks)

.....
.....
.....

C) Name **two** modern methods of fishing? (2marks).

.....
.....

D) Use the map below and answer the following question;




Complete the table below. One example is done for you. (4Marks).

NO	Name of the fishing grounds
A	North-East pacific fishing grounds
B	
C	
D	
E	

PART FOUR: EXTENDED QUESTION (14 MARKS)

Answer **only two** questions

- 1.A) Define the term energy? (2Marks)
 B) Name the source of energy which produced in the below diagram. (3mark)



C)State **two** advantages and disadvantages of above energy (2marks).

2. A) Define transport? (2mark)

B) Which type of transport is represented by the below diagram? (1mark)



C. Discuss **four** Advantages of the above transport. (4marks)

3. A) Define term fishery? (1mark)

B. Describe any **two** problems facing fishing in Somalia. (2mark).

C. Differentiate between pelagic and demersal fish. (4marks)

Question: _____



Question: _____

END