

WASAARADDA WAXBARASHADA IYO TACLIINTA  
SARE

IMTIXAANKA FASALKA 8AAD. 2020

**SAYNIS**



XAFIISKA IMTIXAANAADKA PUNTLAND



# WASAARADDA WAXBARASHADA IYO TACLIINTA SARE XAFIISKA IMTIXAANAADKA PUNTLAND

Code Number

IMTIXAANKA FASALKA 8AAD, 2020  
AMIN: 1 SAAC IYO 10 DAQIIQO AKHRIS AH

## SAYNIS

### TILMAAMAHA IMTIXAANKA

- Waxaa imtixaanku ka kooban yahay 3 bog
- Tiri bogagga, hadday wax ka maqan yihiin u sheeg ilaaliyaha imtixaanka
- Haku qorin magacaaga iyo Roll lambarkaaga toona warqadda imtixaanka
- Hubi in waraaqda lifaaqu ku dhegen tahay imtixaanka, hadday kaa maqan tahay u sheeg ilaaliyaha imtixaanka.
- Lama ogola waraaqo dheeraad ah
- Jawaabtu hadday kaa qaldanto isku tallaab saar, kadibna qor tan saxda ah.

Imtixaanku wuxuu ka kooban yahay:

QAYBTA	DHIBCAHA
Qaybta 1aad	45 dhibcood
Qaybta 2aad	55 dhibcood
<b>Wadarta: 100 Dhibcood</b>	

### Waxaa iska leh saxaha

QAYBAHA	DHIBCAHA
QAYBTA 1AAD	
QAYBTA 2AAD	
WADAR	%



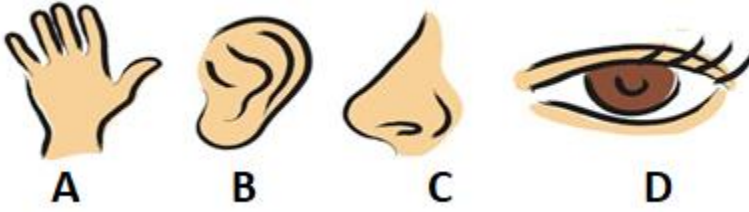
**SOM EXAMS**

**QAYBTA 1AAD: GOOBO GELI JAWAABTA SAXDA AH 15x 3 = 45 dhibcood**

1. Halbeega lagu cabrio xoogga waa
 

A) Kilo-mitir	C) Garaam
B) Niyooton	D) Millimitir
2. Cudurka AIDSKA waxaa sababa
 

A) Bakteeriya	C) Fayras
B) Baarasayt	D) Fangas
3. Xubintee ayaa qaabilsan araga?

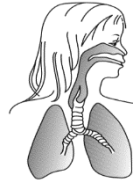


4. marka ay samaysmato cusbo iyo biyo waxaa la isku daray
 

A) Labo asiidh	C) Labo Bays
B) Asiidh iyo Bays	D) Asiidh iyo Biyo
5. Qalabka loo adeegsado noolayaasha ilmo-aragtayda waa
 

A) Dooribiin	C) Iskaan
B) Weynayso	D) Kumputar
6. Sawikan waxa uu tilmaamaya habdhiska
 

A) Dhiig wareegga	
B) Dheefshiidka	
C) Neefsashada	
D) Qalfoofka	



7. Xilli roobaadka Soomaaliya waa
 

A) xagaa iyo Gu'	C) Dayr iyo Jilaal
B) Gu' iyo Dayr	D) Xagaa iyo Dayr
8. Hawshan uu ninkan qabtay waxay la mid tahay
 

A) 40 J	
B) 60 J	
C) 80 J	
D) 100 J	
9. Qaybta geedka u qaabilsan taranka waa
 

A) Caleen	C) Jirid
B) Xidid	D) Ubah



10. Macnah erayga “sintasis” waa

- A) Biyo  
B) Ilays  
C) Hawo  
D) Dhisid

11. Walax ayaa leh cufnaan  $80\text{kg/m}^3$  iyo mug  $3\text{ m}^3$ , hadaba cufkeedu waa

- A)  $220\text{ Kg/M}^3$   
B)  $230\text{Kg/M}^3$   
C)  $240\text{ Kg/M}^3$   
D)  $250\text{ Kg/M}^3$

12. Taangi biyood ayaa uu cabbirkiisu yahay dherer 20 sm, ballac 10 sm, jog 4 sm. Hadaba sheeg muggiisa?

- A)  $500\text{ sm}^3$   
B)  $600\text{ sm}^3$   
C)  $700\text{ sm}^3$   
D)  $800\text{ sm}^3$

13. Aalada lagu cabrio dabaysha waxaa la dhahaa

- A) Baramitir  
B) Kiish-dabayleed  
C) Roob-beeg  
D) Kul-beeg

14. Summada Haydarojiin waa loo qoraa

- A) He  
B) H  
C) Ha  
D) Hu

15. Boqolayda Ogsijiin ee ku jirta hawada waa

- A) 21%  
B) 78%  
C) 42%  
D) 53%

**QAYBTA 2AAD: KA JAWAAB DHAMMAAN SU'AALAHHA SOO SOCDA 55 DHIBCOOD**

1. a) Waa maxay fotoosintisku? 3 dhibcood

\_\_\_\_\_

b) Sawirkan waxa uu tilmaamayaa silsilad cunto

**Caws → Jirriqaa → Mulac → Dafo**

i) Sheeg soo saaraha silsilada cuntada? 2 dhibcood

ii) Magacow quutaha labaad ee silsilada cuntada? 2 dhibcood

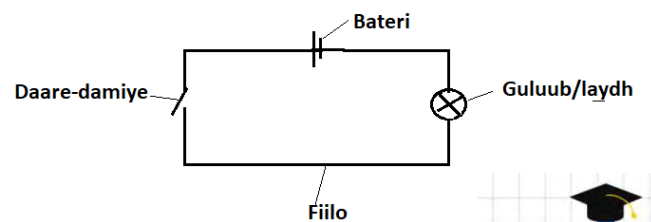
2. Sawirkan waxa uu muujinaya mareeg toosan

a) Sheeg shaqada uu qabto dare-damiyaha? 4 dhibcood

\_\_\_\_\_

\_\_\_\_\_

\_\_\_\_\_



b) Sharax kooban ka bixi waxtarka korantada? 4 dhibcood

\_\_\_\_\_

\_\_\_\_\_



c) Tax labo nooc ka mid ah dikhawga? 4 dhibcood

---

3. a) Magacow labo walxood oo leh Asiidh? 4 dhibcood

b) walax ayaa leh cuf 400kg iyo mug 20 sm<sup>3</sup> ah, soo saar waxlaxda cufnaanteeda?

4 dhibcood

---



---



---

4. U kala saar walxahaan ilays-gudbiye iyo ilays-ma-gudbiye

8 dhibcood

**Dhalo, Alwaax, Biyo, Dhagax**

ilays-gudbiye	ilays-ma-gudbiye
1.	1,
2.	2.

5. Isku aadi Habdhisyadaan iyo Xubintooda muhiimka ah

10 dhibcood

Habdhisika	Jawaab	Xubin
1. Dheefshiidka		A) Wadnaha
2. Qalfoofka		B) Maskaxda
3. Neefsashada		C) Lafaha
4. Wareega dhiigga		D) Caloosha
5. Dareen wadaha		E) Sanbabka

6. Isku aadi Cuduradaan iyo sida uu ku fido

10 dhibcood

Cudur	Jawaab	Fiditaanka
1. Aidhis		A) Kaneecada
2. Daacuun		B) Neefsashada
3. Malaariyo/duumo		C) Galmada
4. Canbaarta		D) Cuntada wasakhaysan
5. Qaaxada		E) Wadaagida shanlada