

MINISTRY OF EDUCATION AND HIGHER EDUCATION

GRADE 12 EXAMS, 2024

# GEOGRAPHY

**20  
24**

P/LAND NATIONAL EXAMINATION BOARD



**MINISTRY OF EDUCATION AND HIGHER EDUCATION  
PUNTLAND NATIONAL EXAMINATIONS BOARD**

Name of Student			
Roll Number			
Name of School			
Region:		District:	

**FORM FOUR EXAMINATION, 2024**  
**TIME: 2 HOURS PLUS 10 MINUTES FOR READING**

# GEOGRAPHY

**Instructions to candidates**

- Answer all the questions in Part one, Part two and Part three
- Answer **ONLY** three questions in Part four
- This paper consists of 11 pages, count it and if any is missing inform your invigilator
- Write your name and roll number on the exam paper
- No extra paper is allowed.
- If you make a mistake, cross out the incorrect answer and write your correct answer.

**This exam paper consists of following Parts**

Parts	Marks
Part one: Multiple questions	10 marks
Part two: Matching questions	10 marks
Part three: Structured questions	65 marks
Part four: Extended questions	15 marks
<b>Total:</b>	<b>100 Marks</b>

**For the markers only**

PARTS	MARKS
Part one	
Part two	
Part three	
Part four	
<b>Total</b>	



Use this page for rough work. It will NOT be marked.

A series of horizontal dotted lines spanning the width of the page, intended for students to use as a workspace for rough work during the examination.



**PART ONE: MULTIPLE CHOICE QUESTIONS**

**(10 MARKS)**

**Select the best answer from the options provided.**

1. The strait of Bab-al-Mandab links two water bodies of
  - a. Red Sea and Gulf of Aden
  - b. Atlantic Ocean and Mediterranean
  - c. Mediterranean Sea and Red Sea
  - d. Arabian sea and Arabian Gulf.
2. All these are challenges or problems faced by food production in the Arab States EXCEPT
  - a. Political instability
  - b. Peace and Security
  - c. Water scarcity
  - d. Pests and diseases
3. Which one of the following is NOT parts of photography?
  - a. Background
  - b. Underground
  - c. Middle ground
  - d. Foreground
4. Which of the following is a non-renewable source of energy?
  - a. Solar power
  - b. Wind power
  - c. Geothermal energy
  - d. Coal
5. The representation of part or whole of the earth on flat surface is known as
  - a. Scale
  - b. Direction
  - c. Bearing
  - d. Map
6. Goods and Services produced with in country and sold to other country is called
  - a. Import
  - b. Export
  - c. Supply
  - d. Demand
7. What is the process of planting trees in an area, where there were no trees?
  - a. Reforestation
  - b. Afforestation
  - c. Deforestation
  - d. Clearcutting
8. Which of the following is an example of an infrastructure used in air transport?
  - a. Seaport
  - b. Airport
  - c. Railway station
  - d. Bus terminal
9. The following are negative environmental impacts caused by mining activities EXCEPT
  - a. Ugliness of environment
  - b. Enhanced biodiversity
  - c. Soil Erosion
  - d. Health Hazards.
10. Which of the following is an example of a primary industry?
  - a. Mining
  - b. Banking
  - c. Retail
  - d. Education

**PART TWO: MATCHING**

Match the words in **Column A** to their Meaning in **Column B**. (10 MARKS).

COLUMN A	ANSWER	COLUMN B
1. Solar energy		a. Those grow by natural means of seed dispersal.
2. Natural forests		b. Type of fish Found near surface of the sea.
3. Railway transport		c. Minerals with no metal components.
4. Opencast mining		d. used when mineral deposits lie near the earth's surface
5. Non-metallic minerals		e. The contamination of harm full substances on the land.
6. Dairy farming		f. The seasonal migration of herdsmen with their animals from the lowlands to the highlands.
7. Air pollution		g. This is a mode of transport that uses trains to move people and goods from one location to another.
8. Pelagic fish		h. Power generated from the electro-magnetic radiation from the sun.
9. Land Pollution		i. Refers addition of toxic substances in the atmosphere.
10. Transhumance		j. The rearing of livestock for their milk and milk's products

**PART THREE: STRUCTURED QUESTIONS**

(65 Marks)

1. A) What is photograph?

\_\_\_\_\_ (1mark)

B) Distinguish between Ground photograph and Aerial photograph.

\_\_\_\_\_  
\_\_\_\_\_  
\_\_\_\_\_ (2 marks)

C) State any three uses of Gradient.

---

---

---

(3 marks).

2. A) Define the term agriculture

---

---

(1mark)

B) Mention any three among reasons facilitated agricultural beginning in middle east.

---

---

---

---

(3 marks).

C) Differentiate between intensive and extensive farming (4 marks)

Intensive Farming	Extensive farming

3. A) Differentiate between mining and mineral.

i. Mining:

---

---

---

(1 mark).

ii. Minerals:

---

---

---

(1 marks).





B). State the three methods of mining minerals.

---

---

---

---

(3 Marks).

C) Describe any **Three** problems faced mining minerals from earth.

---

---

---

---

(3Marks)

4. A) Define the term transportation.

---

---

---

(1mark).

B) Name the type of land transport represented by the diagram.



---

(1Marks).

C) List any two dis-advantages of the above type of transport.

---

---

---

(2marks)

D) Distinguish between air and water transportation.

---



---



---

(2marks)

5. A) Define the term Energy.

---



---

(1marks).

B) List any three difference between renewable and non-renewable energy? (3 Marks).

Renewable energy	Non-renewable
1.	1.
2.	2.
3.	3.

C) Describe any two causes of the Energy crisis in the world.

---



---



---

(2marks).

6. A) Define the term fishery.

---



---

1mark.

B) State four main types of fishes.

---



---



---



---

4 Marks.

C) Mention any two among traditional methods of fishing.

---



---

(2marks).





D) Identify two possible solutions for the problems faced fishing in Somalia.

---



---



---

(2Marks).

7. A) Define the term trade.

---

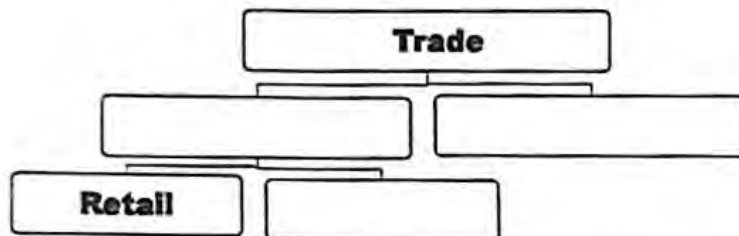


---

(1marks).

B). Study carefully at the below chart and then Complete it.

(4Marks).



C). Classify the following in Import and Export goods of Somalia

(4marks).

(Clothes, Livestock, Fishing, spare parts, Frankincense, Vehicles, Electronics, Banana)

Imports goods	Export goods
1.	1.
2.	2.
3.	3.

8. A). Define term forest.

---



---



---

(1Mark).

B) Briefly explain how the following factors can influence Forests.

I. Temperature

---

---

---

(1Marks)

II. Rainfall

---

---

---

(1Marks)

C) List any three importance of forests. 3 marks

---

---

---

9. A) Define the term Arab-league?

---

---

---

1mark

B) State any two objectives behind the foundation of Arab League.

---

---

---

(2 marks).

C) Label the Arab countries marked A, B, C and D on the following map (4 Marks).

- A. \_\_\_\_\_
- B. \_\_\_\_\_
- C. \_\_\_\_\_
- D. \_\_\_\_\_





**PART FOUR: EXTENDED QUESTIONS**

**(15 MARKS)**

Answer **ONLY THREE** among the following questions

1. A) Define term cereals.

---

---

---

1Marks.

B) *Look at the below diagram and then answer the followed questions.*



i. Name a cereal of the above image

---

(1mark).

ii. List any three growing conditions of the above cereal

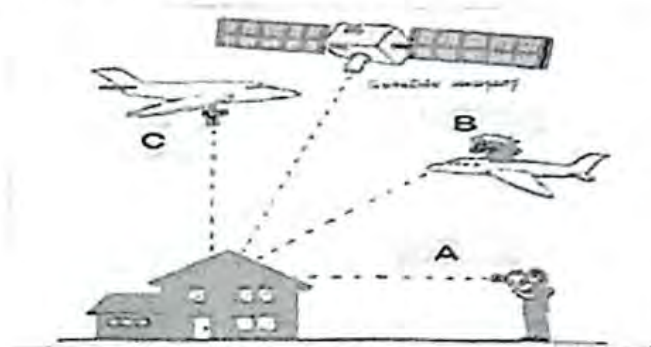
3 marks

---

---

---

2. Look at the below photographs and then answer the questions.



A) Which photo types are represented by the letters A, B, and C?

i. A: \_\_\_\_\_ (1mark).

ii. B: \_\_\_\_\_ (1mark).

iii. C: \_\_\_\_\_ (1mark)

B) Name two advantages of a photograph.

\_\_\_\_\_

\_\_\_\_\_


\_\_\_\_\_ (2mark).

3. A) Define the term settlement

\_\_\_\_\_

\_\_\_\_\_ (1marks).

B) Study the following figure carefully and answer the question below.



i. Name the pattern of the settlement marked A

\_\_\_\_\_ (1Mark).



ii. Name the pattern of the settlement marked B

\_\_\_\_\_ (1Mark).

iii. Name the pattern of the settlement marked C

\_\_\_\_\_ (1Mark).

4. A) Define the term industrialization.

\_\_\_\_\_ (1Mark).

B) List two types of secondary industries.

\_\_\_\_\_ (2Marks)

C) Count down any two significances of industries.

\_\_\_\_\_  
\_\_\_\_\_  
\_\_\_\_\_  
\_\_\_\_\_ (2Marks).

END